

The DOMINO CAPER BACK WALL QUIZ

Remember, first pips are the column number and second pips are the row

The Barter's Back Wall Posters

5	James Cook	EGYPT	Geometry	Water Cycle
4	Friends	Metric System	Number Patterns	Local Community
3	Graphs	The 5 Senses	Families	The Tale of Despereau Despereau
2	Life Cycle Of Frogs	Our school	Poems	Tessellations
1	INDIA	Spelling words	Kid's postcards	Land care
	1	2	3	4

Columns

Q1 This is Blake's domino. What poster does it point to?



.....

Q2 Which poster does this domino point to?



.....

Q3 Colour the pips to point to *Metric System*.



Q4 Which poster does this domino point to?



.....

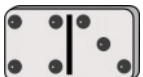

Q5 Which poster does this domino point to?



.....




Q6 Colour the pips to point to *Poems*.



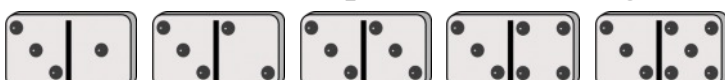
Q7 Does the domino  point to the same poster as  ?

Q8 Lightly shade the posters these 4 dominoes point to. If this poster wall was larger, what would be the next position in this domino pattern?



Q9 Starting with the *Friends* poster, fill in these dominoes to form a downward diagonal line of 4 posters.     What do you notice about the pips on these dominoes?

Q10 Describe how these 5 posters are arranged on the back wall.



.....